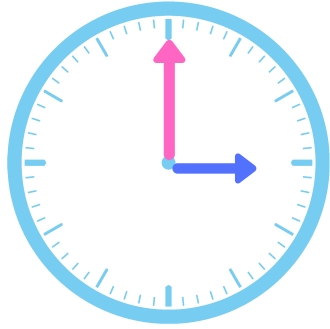


Name: \_\_\_\_\_

Date: \_\_\_\_\_

# TIME: O'CLOCK


Draw the hands on the clock. Write down the time.



3:00


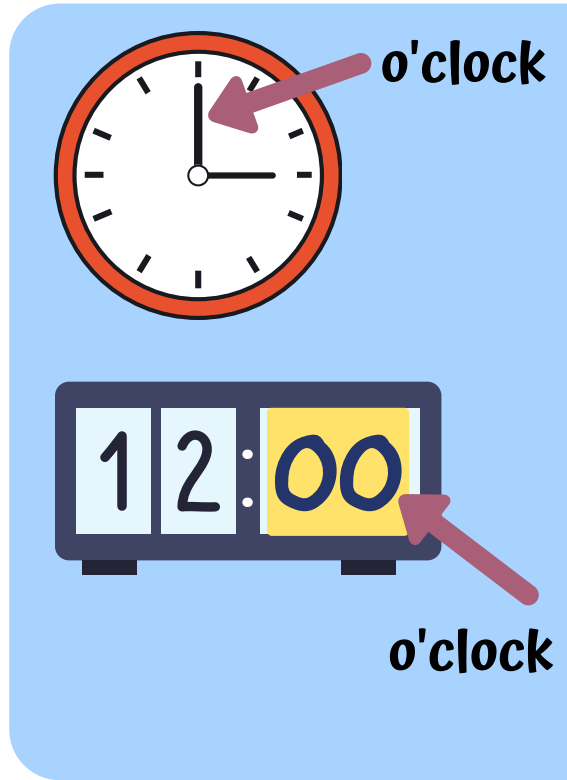
**three o'clock**

---




6:00

---




7:00

---




5:00

---




1:00

---




12:00

---



9:00

---



11:00

---

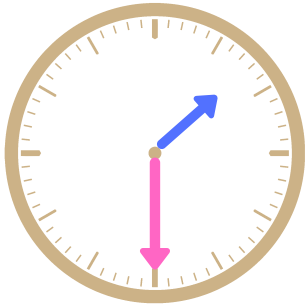


Name: \_\_\_\_\_

Date: \_\_\_\_\_

# TIME: HALF PAST


Draw the hands on the clock. Write down the time.



1:30

**half past one**

---




12:30

---


half past

half past




2:30

---




6:30

---




9:30

---




7:30

---



11:30

---



10:30

---



Name: \_\_\_\_\_

Date: \_\_\_\_\_

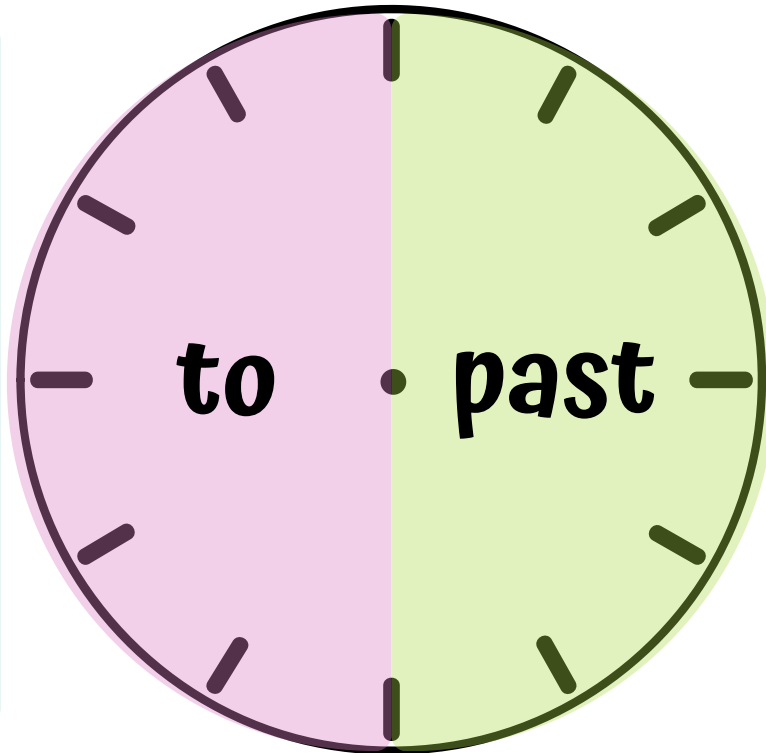
# TIME: A QUARTER PAST/TO



a quarter  
to one



a quarter  
to twelve



a quarter  
past twelve



a quarter  
past eleven

Write down the time

2:15

\_\_\_\_\_

6:15

\_\_\_\_\_

2:15

\_\_\_\_\_

9:45

\_\_\_\_\_

6:45

\_\_\_\_\_

10:45

\_\_\_\_\_

9:15

\_\_\_\_\_

3:45

\_\_\_\_\_



Name: \_\_\_\_\_

Date: \_\_\_\_\_

# ~WAYS TO TELL THE TIME~

There are two common ways of telling the time.



1 Say the hour first and then the minutes. (Hour + Minutes)

6:45 – It's six forty-five

10:09 – It's ten O-nine (the O is said like the letter O)

12:11 – It's twelve eleven

5:21 – It's five twenty-one

7:01

2:10

3:45

5:58

7:01

11:42

2 Say the minutes first and then the hour. (Minutes + PAST / TO + Hour)

For minutes 1-30 we use PAST after the minutes.

For minutes 31-59 we use TO after the minutes.

6:45 – It's fifteen to seven

10:09 – It's nine past ten

12:11 – It's eleven past twelve

5:21 – It's twenty-one past five



7:01

2:10

3:45

5:58

7:01

11:42

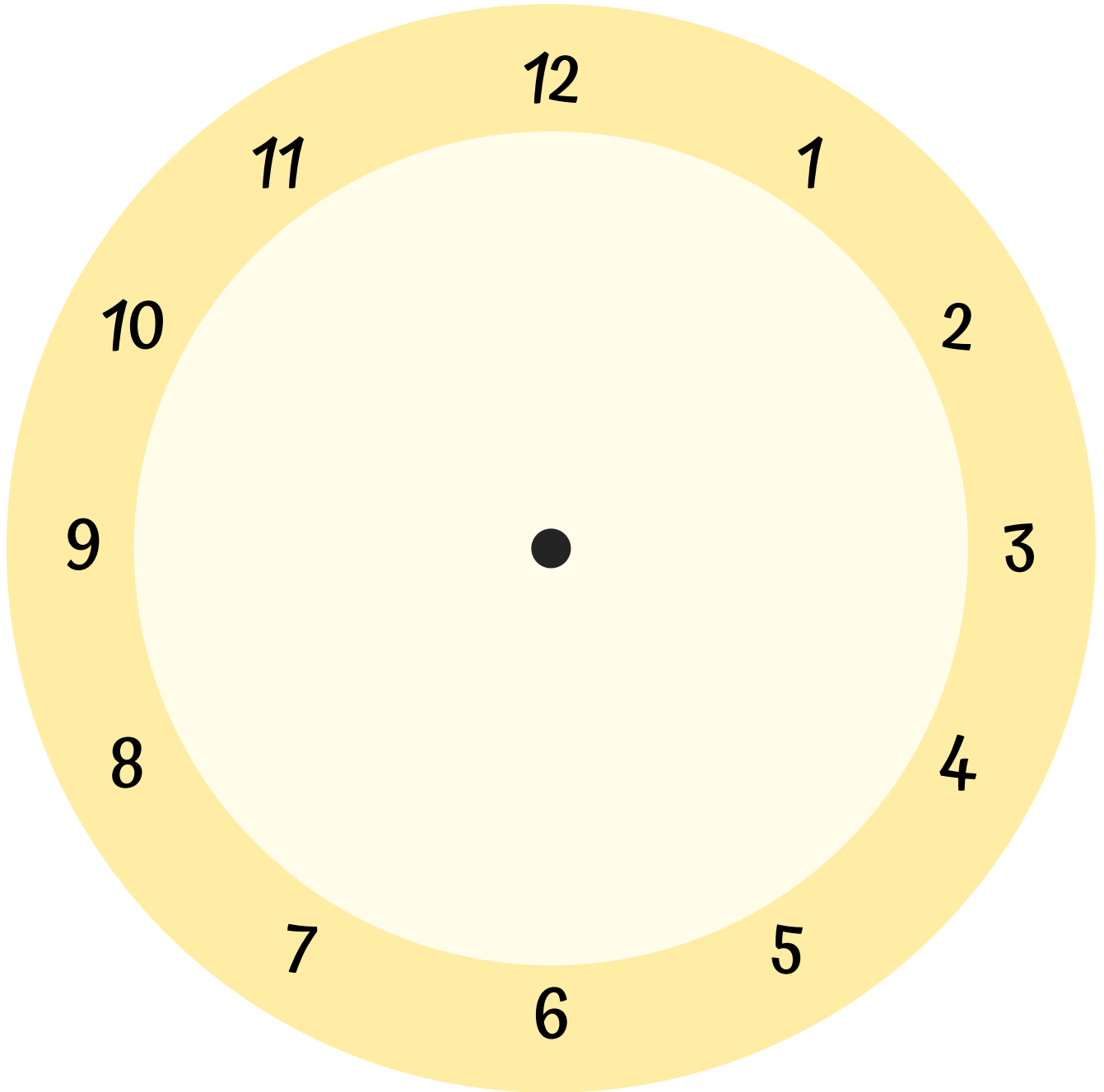


Name: \_\_\_\_\_

Date: \_\_\_\_\_

# DIY CLOCK! (Part 1)

Directions: Print the clock and hands on cardboard. Cut them out. Fix the clock hands with a paper fastener onto the clock. There you go! You have your own clock!



Hour hand



Minute hand



Name: \_\_\_\_\_

Date: \_\_\_\_\_

# DIY CLOCK! (Part 2)

What time did you get on your DIY clock? Write and draw them down.

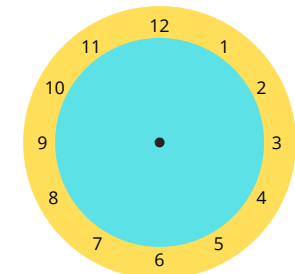
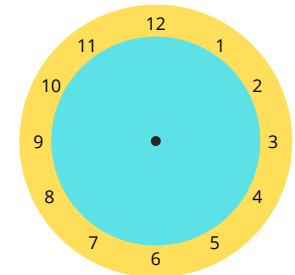
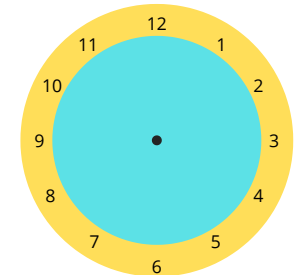
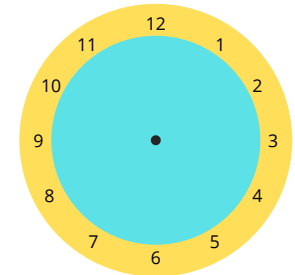
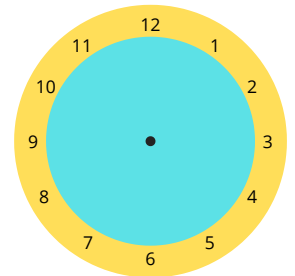
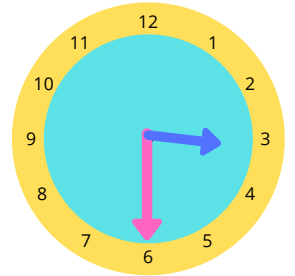
Digital

Tell the time in words

*Example:*

3:30

Three thirty/ half past three



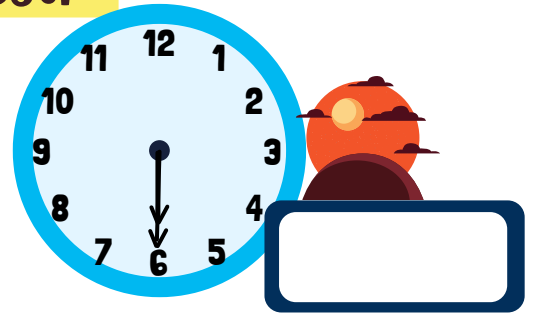
Name: \_\_\_\_\_

Date: \_\_\_\_\_

# PARTS OF THE DAY

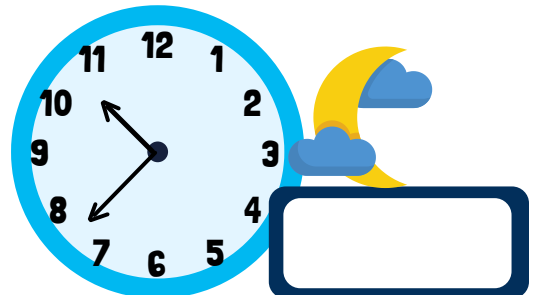
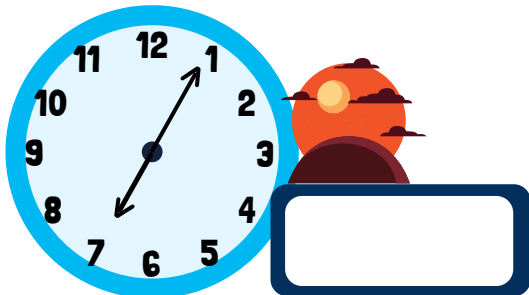




Follow the example and complete the rest.



eg. one o'clock in

the afternoon



Name: \_\_\_\_\_ Date: \_\_\_\_\_

# JANE'S TIMETABLE

Finish the conversation between Jane and Winnie below.

## Jane's Sunday timetable

|            |                           |
|------------|---------------------------|
| 8:15 a.m.  | get up and wash my face   |
| 9:45 a.m.  | have breakfast            |
| 11:00 a.m. | have piano lessons        |
| 12:50 p.m. | have lunch                |
| 4:50 p.m.  | do my homework            |
| 7:30 p.m.  | have dinner               |
| 9:05 p.m.  | have a bath and go to bed |



**Winnie** : Jane, what are your plans this coming Sunday?

**Jane** : I'm sorry Winnie but I'm busy this Sunday. I have to get up early at \_\_\_\_\_ in the morning and wash my face so that I have time to eat breakfast at \_\_\_\_\_.



**Winnie** : Why would you want to get up early on a holiday?

**Jane** : This is because I have piano lessons at \_\_\_\_\_. I want to practise before the class starts.

**Winnie** : Let me see. Are you free after your lunchtime at \_\_\_\_\_ in the afternoon?



**Jane** : I'm sorry but I spend that time to study and finish up my homework at \_\_\_\_\_. After that, I will have dinner with my family at \_\_\_\_\_ in the evening. Finally, I will take a bath and go to bed at \_\_\_\_\_ at night.

**Winnie** : I'll be so lonely this Sunday without you.

